

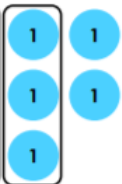


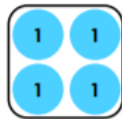
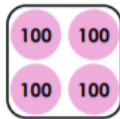
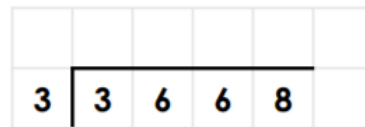
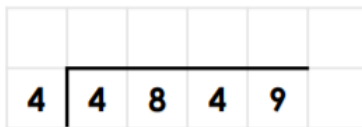
Week 1 THURSDAY - 26.03.2020

IALT Divide - Mild

Remember to use the bus stop method. Watch the video to support your learning if you need. Give your answer with remainders (R).


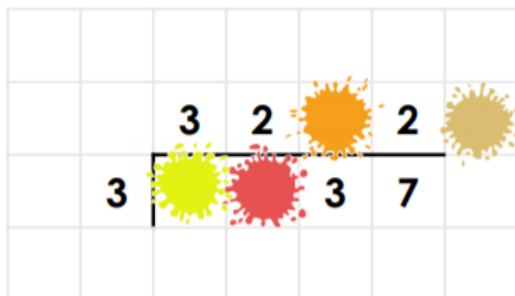
$$56 \div 2 = \quad 476 \div 3 = \quad 3145 \div 7 =$$

1. Use  $>$ ,  $<$  or  $=$  to complete the statement below.



VF

3. Find the missing digits.



Challenge - What are your top tips for dividing using the bus stop method?