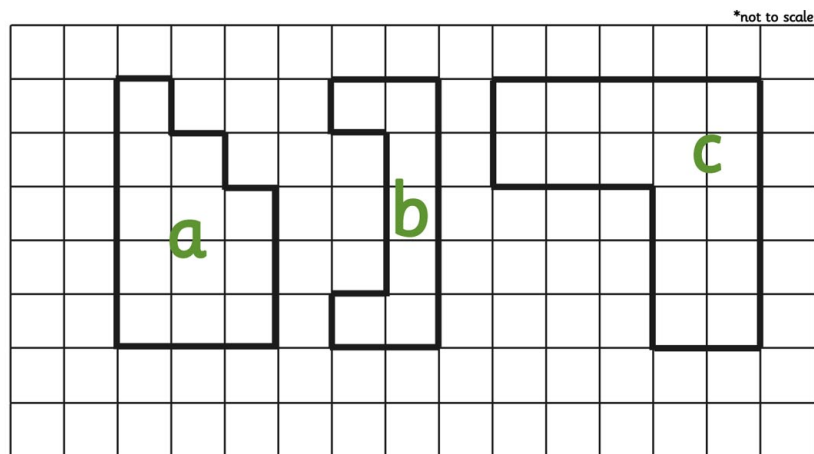


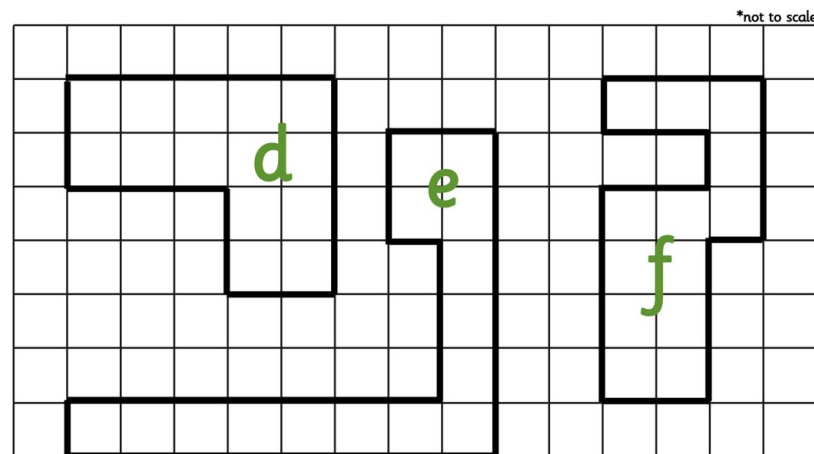
Find the perimeter of these shapes in cm.



On centimetre squared paper, draw 3 rectilinear shapes with a perimeter of 22cm.

twinkl.co.uk

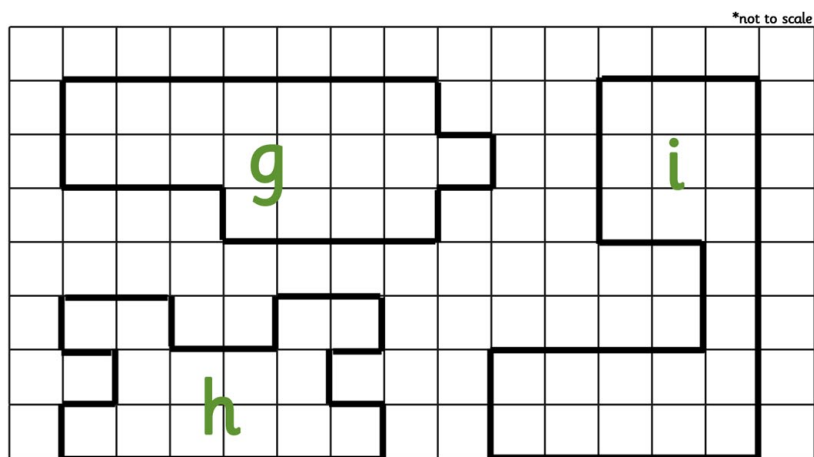
Find the perimeter of these shapes in cm.



On centimetre squared paper, draw 3 rectilinear shapes with a perimeter of 14cm.

twinkl.co.uk

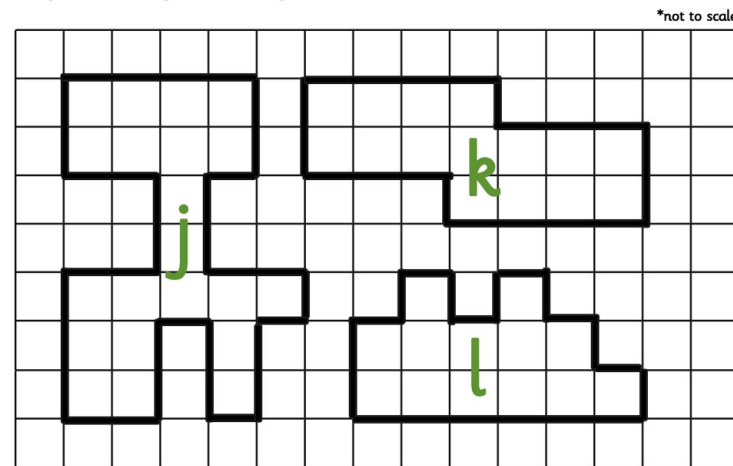
Find the perimeter of these shapes in cm.



On centimetre squared paper, draw 3 rectilinear shapes with a perimeter of 8cm.

twinkl.co.uk

Find the perimeter of these shapes in cm.

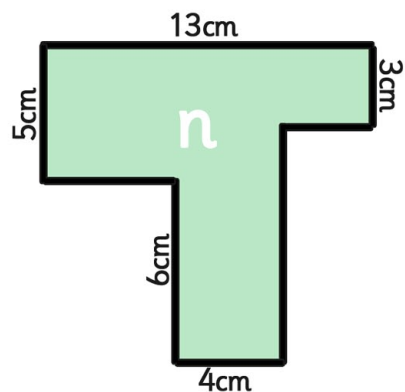
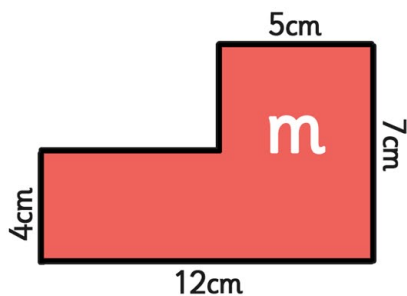


On centimetre squared paper, draw 3 rectilinear shapes with a perimeter of 26cm.

twinkl.co.uk

Find the perimeter of these shapes in cm.

*not to scale

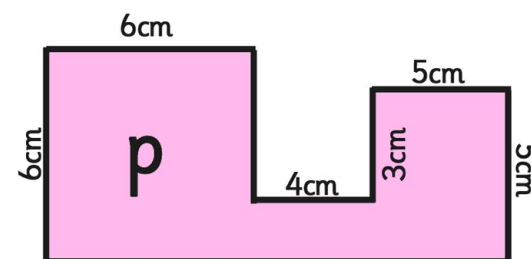
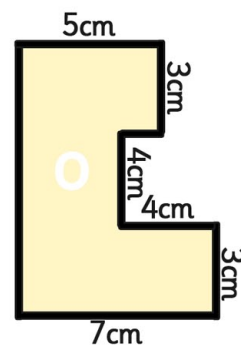


Draw a rectilinear shape with a perimeter of 38 cm. Mark the length of each side.

twinkl.co.uk

Find the perimeter of these shapes in cm.

*not to scale

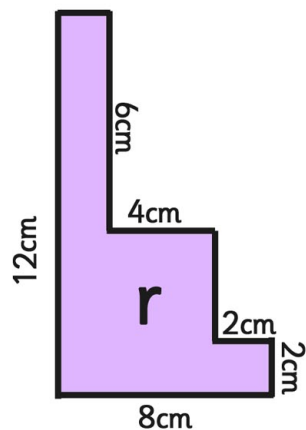
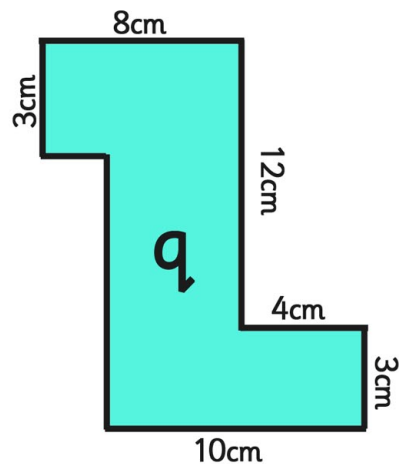


Draw a rectilinear shape with a perimeter of 48 cm. Mark the length of each side.

twinkl.co.uk

Find the perimeter of these shapes in cm.

*not to scale

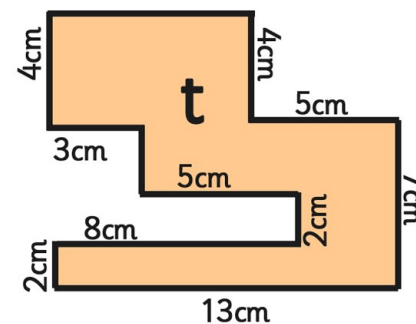
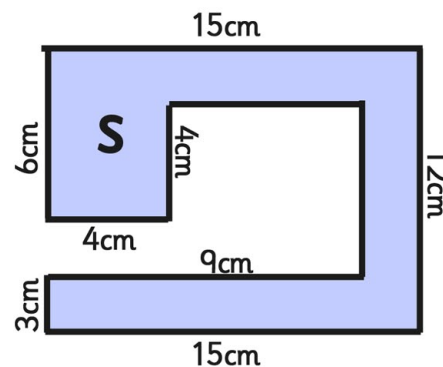


Draw a rectilinear shape with a perimeter of 56 cm. Mark the length of each side.

twinkl.co.uk

Find the perimeter of these shapes in cm.

*not to scale



Draw a rectilinear shape with a perimeter of 76 cm. Mark the length of each side.

twinkl.co.uk

Perimeter Challenge Cards

Answers

A 16cm

B 16cm

C 20cm

D 18cm

E 30cm

F 22cm

G 22cm

H 24cm

I 28cm

J 34cm

K 20cm

L 20cm

M 38cm

N 48cm

O 38cm

P 48cm

Q 54cm

R 40cm

S 80cm

T 64 cm