

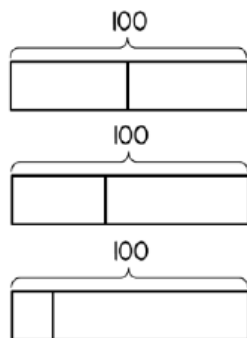
Wednesday 6th May 2020

L1: Add and Subtract using the bar model

Watch the video below to remind yourself how to correctly use the bar model and then answer the questions.

1

Match the diagram to the number sentence.



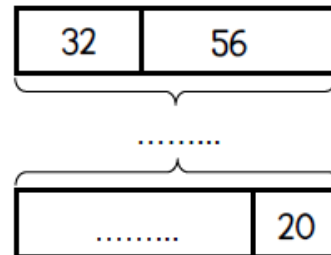
$$50 + 50 = 100$$

$$15 + 85 = 100$$

$$40 + 60 = 100$$

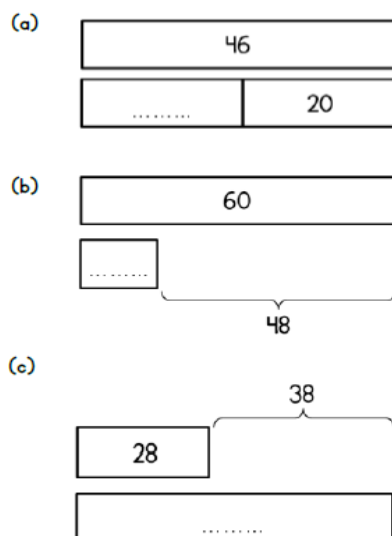
2

Work out the missing values.



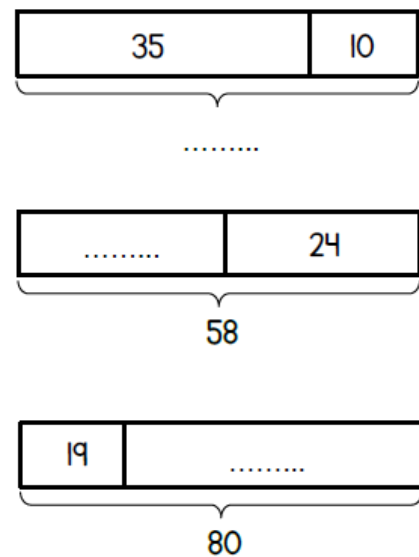
3

Work out the missing values.



4

Work out the missing values.



Challenge

Draw a bar model for the following calculations.

1. $15 + 75 = 90$
2. $120 - 45 = ?$
3. $? + 67 = 103$