

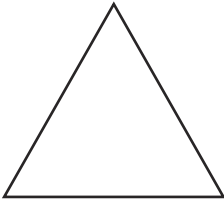
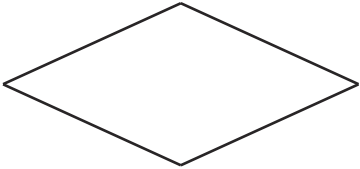

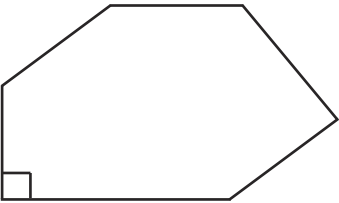
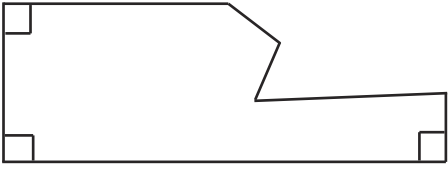
2D Shape Draw

Read the instructions carefully and draw shapes that match the description in the boxes. Don't forget to use a ruler!

Shape	Special Requirements	
Triangle	All angles smaller than right angles.	
Quadrilateral	Two angles larger than a right angle. Two angles smaller than a right angle.	
Pentagon	2 right angles	
Hexagon	1 right angle	
Heptagon	3 right angles	
Octagon	6 right angles	

2D Shape Draw Possible Answers

Read the instructions carefully and draw shapes that match the description in the boxes. Don't forget to use a ruler!

Shape	Special Requirements	
Triangle	All angles smaller than right angles.	
Quadrilateral	Two angles larger than a right angle. Two angles smaller than a right angle.	
Pentagon	2 right angles	
Hexagon	1 right angle	
Heptagon	3 right angles	
Octagon	6 right angles	