


Tuesday 16th June


Task 1 Use gram weights to measure the mass of objects using a balance scale. The ____ weighs ____ grams.



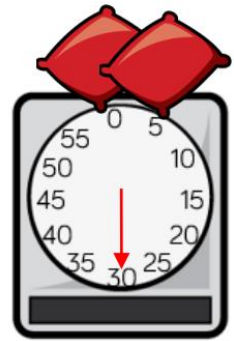
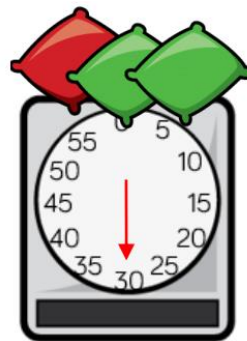
Task 2 Use scales to record the mass of objects in grams.



Task 3 Order the items from heaviest to lightest.



Task 4 Which is heavier, the red or the green beanbag? Explain why.



Task 5



The  weighs g.

The  weighs g.