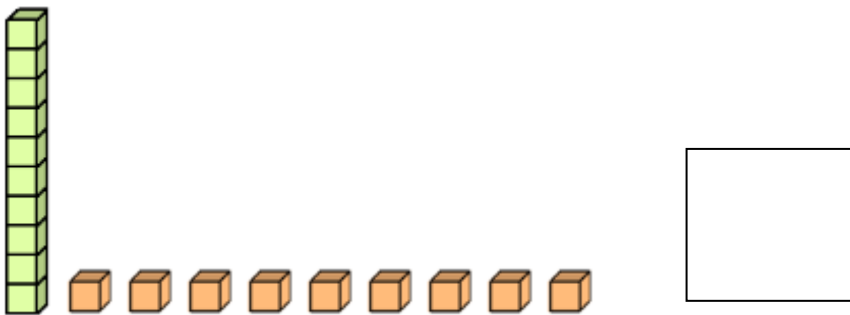
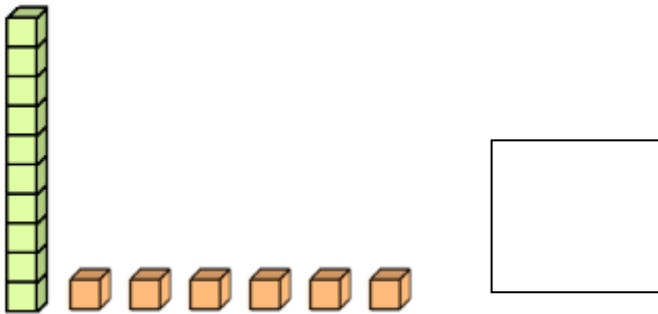
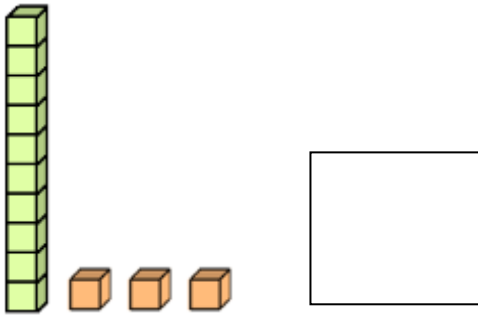


I am learning to recombine



\_\_\_\_\_ = 10 and 7

\_\_\_\_\_ = 10 and 2

\_\_\_\_\_ = 10 and 6

\_\_\_\_\_ = 10 and 5

\_\_\_\_\_ = 10 and 4

\_\_\_\_\_ = 10 and 9

CHALLENGE: Tick or Fix:

15 = 1 ten and 5 ones

19 = 1 ten and 8 ones

16 = 1 ten and 7 ones

14 = 1 ten and 4 ones