



Friday
19th June

Task 1

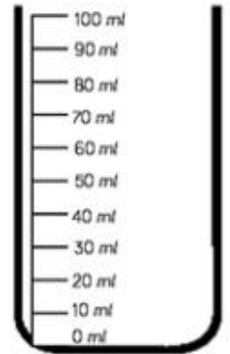
Draw the level on the scale to show the capacity of each container.





The container's capacity is ____ ml

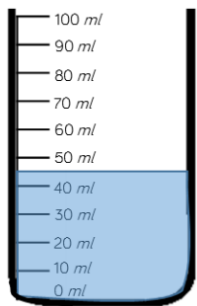


The container's capacity is ____ ml

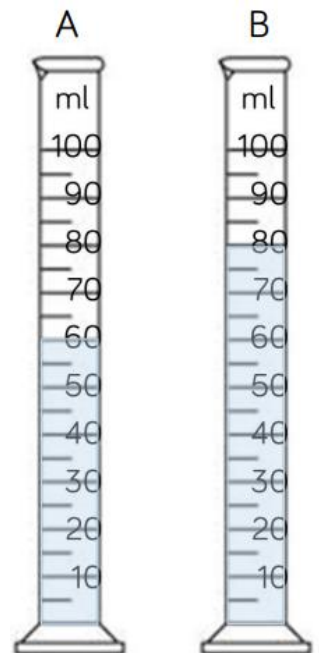


The container's capacity is ____ ml

Task 2 A  holds 5 ml of liquid. How many  of liquid are there in each container?



Task 3 Estimate the amount of water in the container. Explain why you have given your answer.



Task 4 Show how much liquid is in each cylinder after you:

- Pour 3 litres of water into the cylinder.
- Leave 1 litre of cola in the bottle.
- Pour half of the juice into the cylinder.

