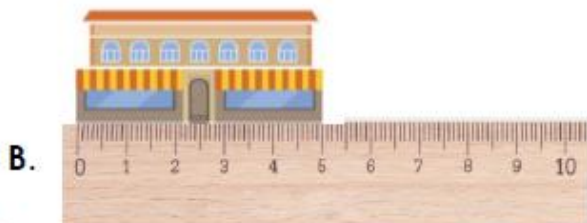


25/6/20

Maths: I am learning to use a ruler accurately

Choose your challenge:

1a. How long are these objects in centimetres?

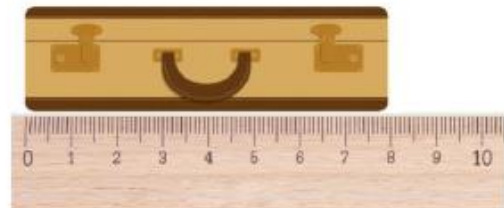


2a. How many centimetres is the arrow showing?



3a. True or false?

This toy suitcase is 7cm long.



VF

4a. Match the measurement to the object.



5cm



2cm



2a. Nadia and Alex are measuring the length of a toy flag pole.



Nadia says,



The pole is 8cm long.

Alex says,

The pole is 7cm long.




Who is correct? Explain your answer.



MILD

5b. How long are these objects in centimetres?



VF

6b. Alex draws a 5cm line. She starts at the arrow. What number will she finish at?



VF

6b. Pippa's colouring pencils measure between 9cm and 14cm.

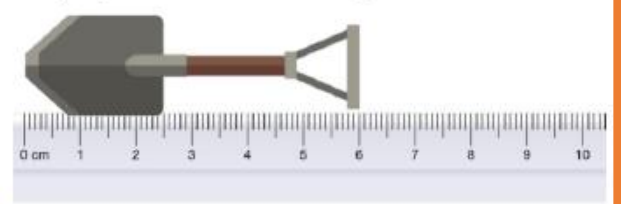
What are the possible measurements her colouring pencils could be?



SPICY

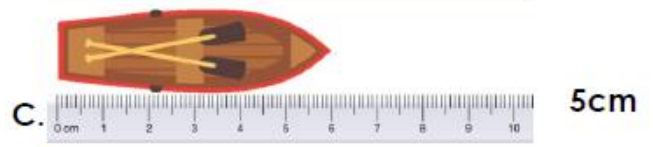


7b. True or false?

This toy spade is 6cm long.




VF

8b. Match the measurement to the toy object.

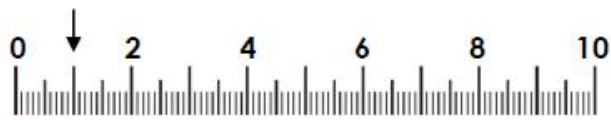


9a. How long are these toy objects in centimetres?



Vf

10a. Ben draws a 6cm line. He starts at the arrow. What number will he finish at?



Vf

8a. William and Isabel are measuring the length of a toy spear.



William says,



The spear is 9cm long.

Isabel says,

The spear is 7cm long.



Who is correct? Explain your answer.



11a. True or false?

This rectangle is 8cm long.



Vf

12a. Match the measurement to the object.

A.		3cm
		
B.		7cm
		
C.		5cm
		



HOT