

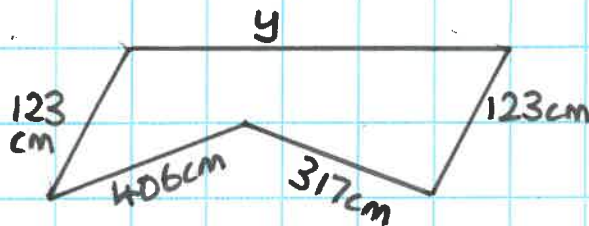
HOT

1) Farmer A and farmer B have these 2 fields:



Whose field has the greatest perimeter? Prove it!

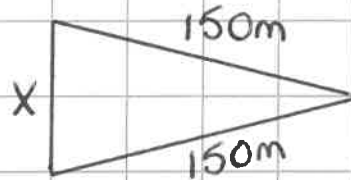
2) The perimeter of this shape is 1100cm.



What is the length of side y ?

ON FIRE CHALLENGE

- A) The perimeter of this shape is 372 m. What is the length of side X?

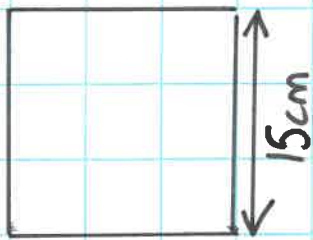


- B) The perimeter of this field is 410m. The farmer needs a fence for the side marked Y. How long does the fence need to be?



MILD

Suzy says that the perimeter of this square is 55cm. Is she correct? Explain your answer.



SPICY

The perimeter of this shape is 100m. What is the length of side y ?

