


I am learning to use repeated addition

Example:



$$4 + 4 + 4 = 12$$

3 groups of 4 = 12



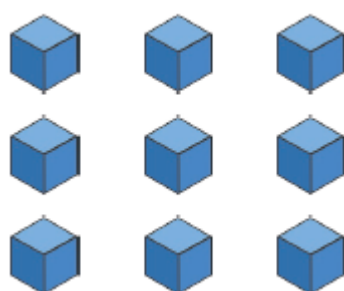
Repeated addition: _____

_____ groups of _____ = _____



Repeated addition: _____

_____ groups of _____ = _____



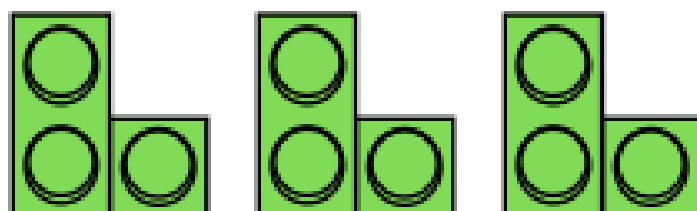
Repeated addition: _____

_____ groups of _____ = _____



Repeated addition: _____

_____ groups of _____ = _____



Repeated addition: _____

_____ groups of _____ = _____