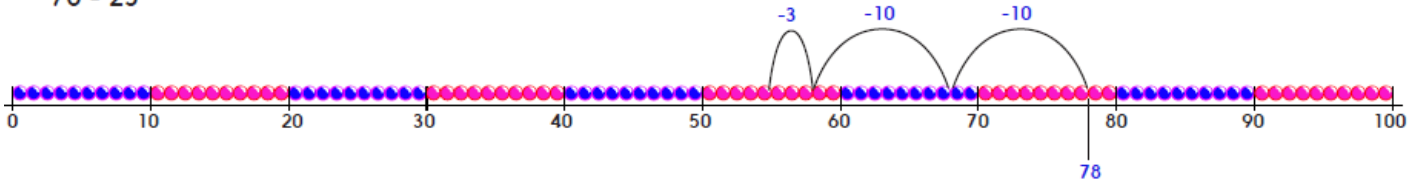


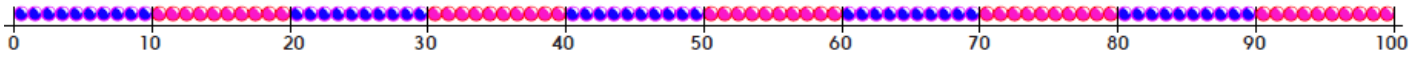
## Practice Sheet Mild 1

### Subtracting 2-digit numbers

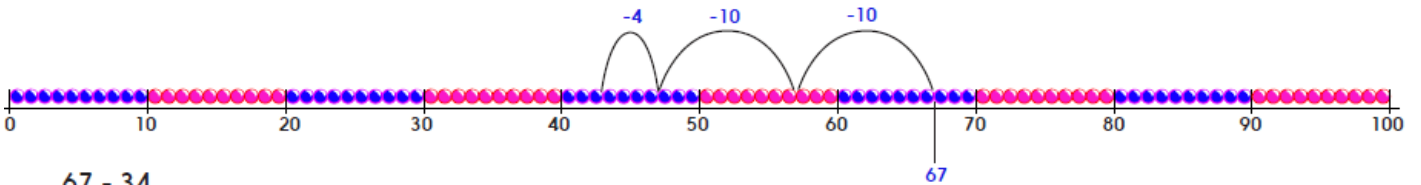
78 - 23



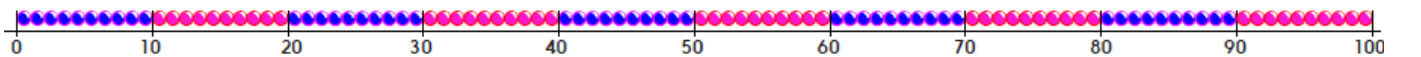
78 - 33



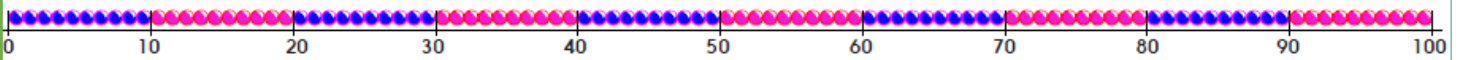
67 - 24



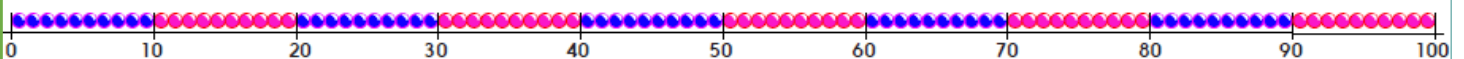
67 - 34



56 - 22



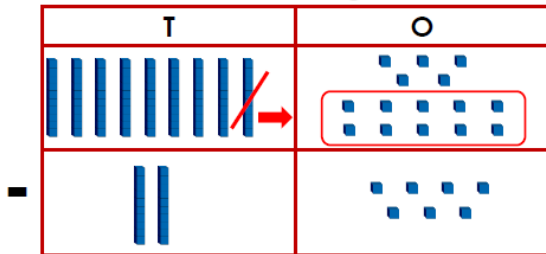
56 - 32



98 - 25



3a. Phil and Jess are solving  $95 - 27$ .



The answer is 58.

Phil

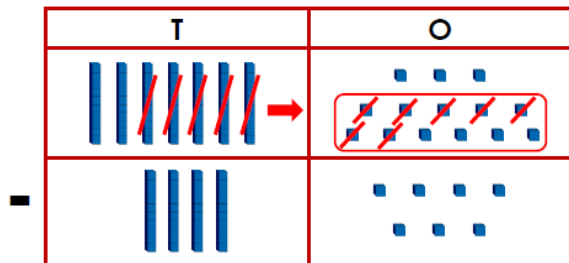


The answer is 68.

Jess

Who is correct? Explain how you know.

1b. Liz has calculated  $73 - 47$ . Her calculation is below.



27

What mistake has she made?

# Practice Sheet Hot

## Subtracting two-digit numbers

Work out the following calculations recording your jottings on a landmarked number line or your own 'empty' number line..

$$78 - 23$$

$$78 - 33$$

$$67 - 24$$

$$67 - 34$$

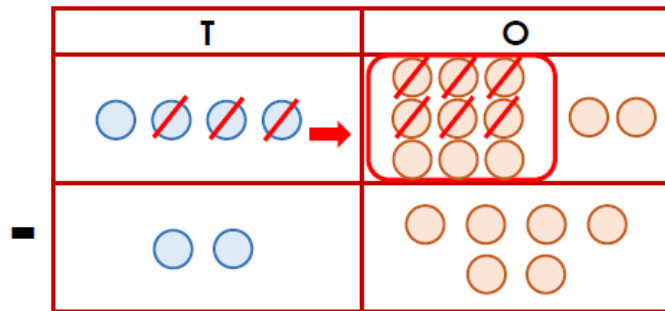
$$56 - 22$$

$$56 - 32$$

$$98 - 25$$

$$98 - 35$$

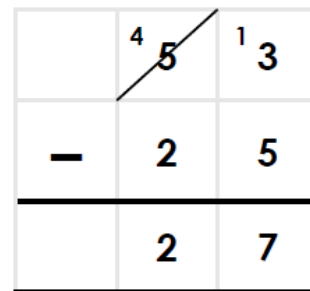
4b. Jill has calculated  $42 - 26$ . Her calculation is below.



15

What mistake has she made?

7a. John has calculated fifty-three subtract twenty-five. His calculation is below.



9a. Matt and Pip are solving:

ninety-six - thirty-nine =

What mistake has he made?



Matt

The answer is 57.



Pip

The answer is 67.

Who is correct? Explain how you know.