

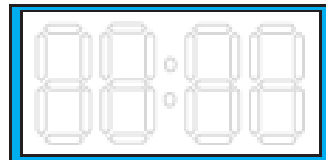
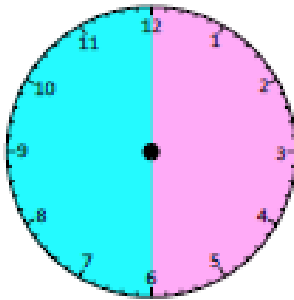
# Practice Sheet Mild

## Analogue and digital

1. Draw the hands on the clock faces and write the digital time.

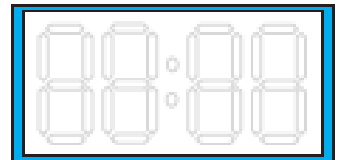
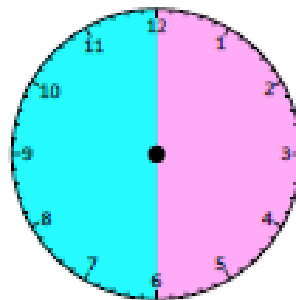
a)

*Seven o'clock*



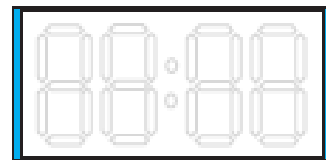
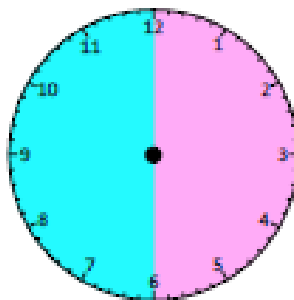
b)

*Half past eight*



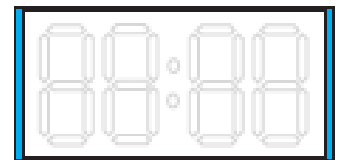
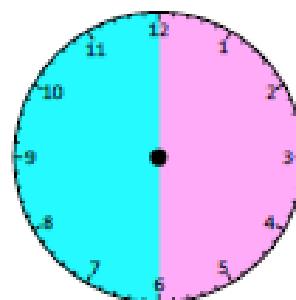
c)

*Nine o'clock*



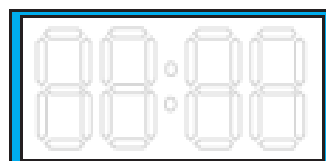
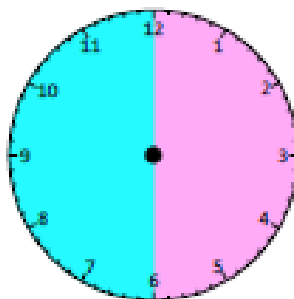
d)

*Quarter past ten*



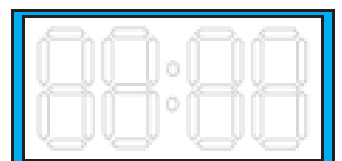
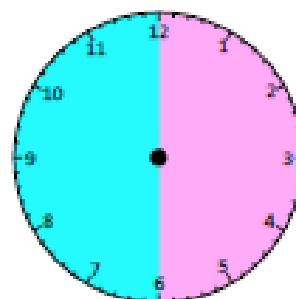
e)

*Half past twelve*



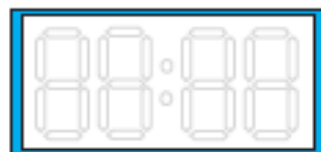
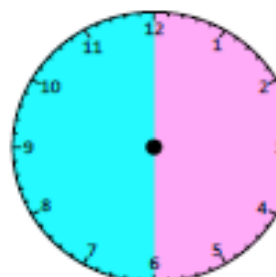
f)

*Quarter past three*



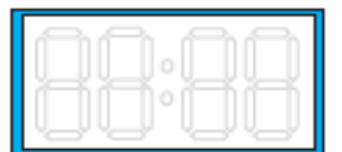
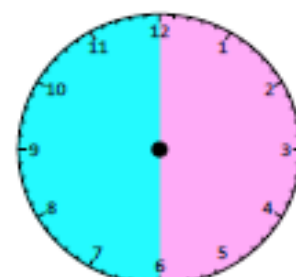
g)

*Quarter to five*



h)

*Half past five*



2a. Talia says,



I finished swimming at 20 to 3 so the minute hand was on the 9.

Is she correct?

Explain why.



R

3a. Jed starts his homework at half past 1.

It takes him 5 minutes to finish his homework.

What time does he finish his homework?



4a. Draw lines to match the correct times.

A



B



C



25 to 4

20 past 9

10 past 10





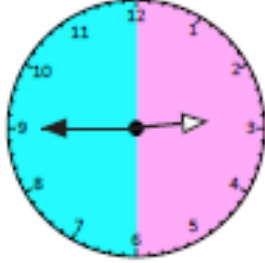




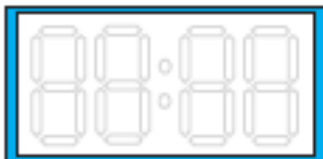

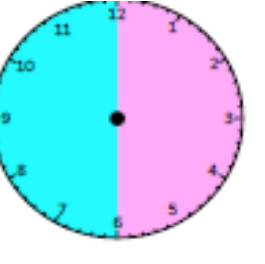
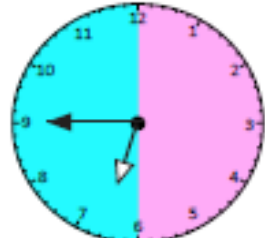
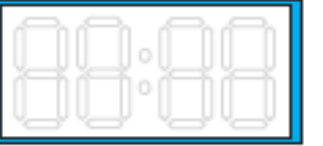
PS

# Practice Sheet Hot

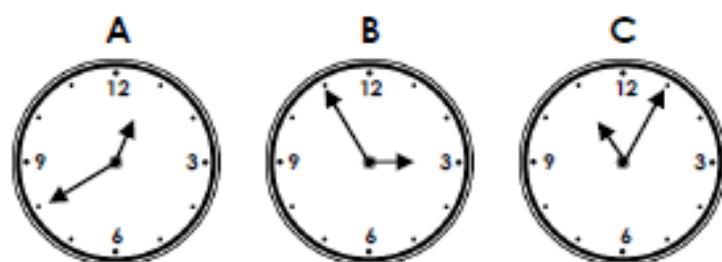
## Analogue and digital

1. Write the time in words.

Then write the time half an hour later.

Clock	Time in words	What time will the new time be?
	Quarter past twelve	
		
		
		
		
		

7a. Draw lines to match the correct times.



5 past 11

20 to 1

5 to 3



PS

8a. Carla says,



I started watching a cartoon at 20 past 9. It finished 35 minutes later so the minute hand was pointing at the 10.

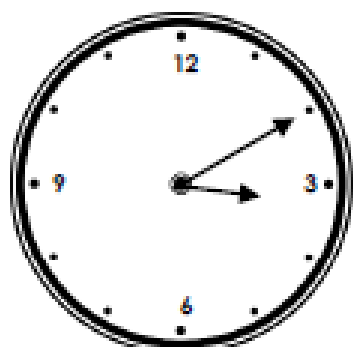
Is she correct?

Explain why.

9b. Saffie gets in from school at 10 past 3.

She plays outside for 5 minutes, reads her book for 5 minutes and then draws for 5 minutes.

What time does she finish drawing?



PS