


## First 5

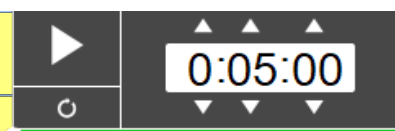
Shout Outs: Maisy and Isabelle

**WWW:** You found different ways to apply your understanding of BIDMAS.

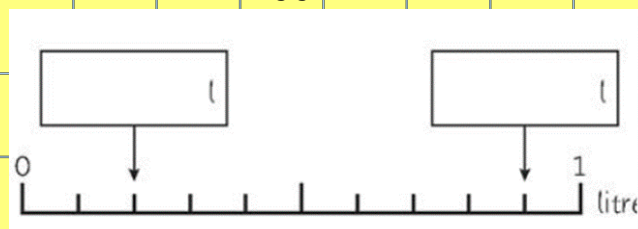
**EBI:** Remember to check your work using the order of operations



## FOCUS QUESTION



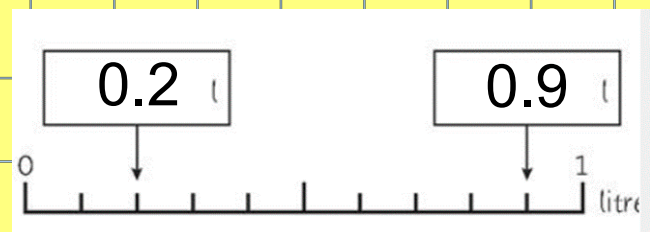
What is the difference in the two values?



Can you help Barbara work out how to read scales? What are your tips?

02.12.20

I am learning to read scales



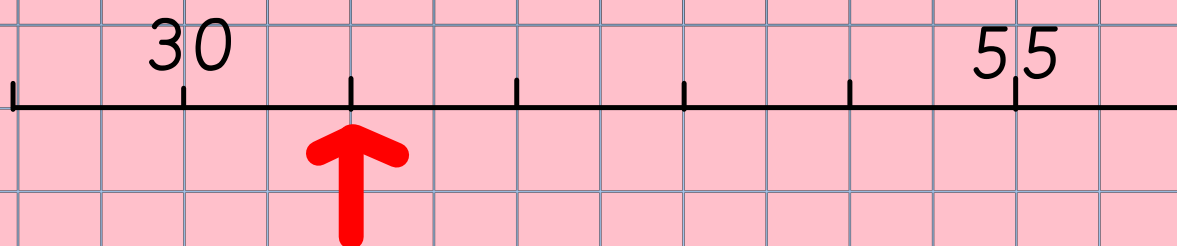
Find two given values



Count how many intervals are between each given value



Divide the difference in values by the number of intervals



Two given values: 30 and 55

Difference between two given values = 25

Count the intervals between = 5

Divide difference by number of intervals  
= 5

Your turn:

